

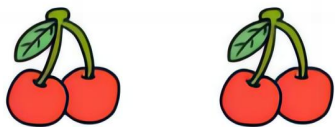
看图列算式专项训练

姓名: _____

学号: _____


用时: _____

一、图列算式 (加法)



? 颗

$$\square \bigcirc \square = \square$$




? 个

$$\square \bigcirc \square = \square$$




? 个

$$\square \bigcirc \square = \square$$




? 颗

$$\square \bigcirc \square = \square$$




? 个

$$\square \bigcirc \square = \square$$




? 根

$$\square \bigcirc \square = \square$$




? 颗

$$\square \bigcirc \square = \square$$



? 个

$$\square \bigcirc \square = \square$$




? 颗

$$\square \bigcirc \square = \square$$


看图列算式专项训练

姓名: _____ 学号: _____ 用时: _____

二、看图列式 (加法)




$$\square \bigcirc \square = \square$$



$$\square \bigcirc \square = \square$$




$$\square \bigcirc \square = \square$$




$$\square \bigcirc \square = \square$$



$$\square \bigcirc \square = \square$$



$$\square \bigcirc \square = \square$$



$$\square \bigcirc \square = \square$$



$$\square \bigcirc \square = \square$$


看图列算式专项训练

姓名: _____

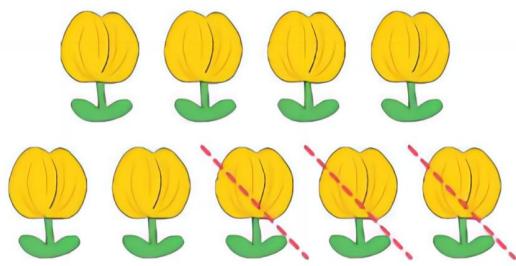
学号: _____

用时: _____


四、看图列式 (减法)



$$\square \bigcirc \square = \square$$




$$\square \bigcirc \square = \square$$




$$\square \bigcirc \square = \square$$



$$\square \bigcirc \square = \square$$




$$\square \bigcirc \square = \square$$



$$\square \bigcirc \square = \square$$



$$\square \bigcirc \square = \square$$




$$\square \bigcirc \square = \square$$


看图列算式专项训练

姓名: _____ 学号: _____ 用时: _____


六、看图列式 (连加)



$$\square \bigcirc \square \bigcirc \square = \square$$




$$\square \bigcirc \square \bigcirc \square = \square$$




$$\square \bigcirc \square \bigcirc \square = \square$$




$$\square \bigcirc \square \bigcirc \square = \square$$



$$\square \bigcirc \square \bigcirc \square = \square$$



$$\square \bigcirc \square \bigcirc \square = \square$$



$$\square \bigcirc \square \bigcirc \square = \square$$




$$\square \bigcirc \square \bigcirc \square = \square$$


看图列算式专项训练

姓名：_____ 学号：_____ 用时：_____


八、看图列式（加减混合）



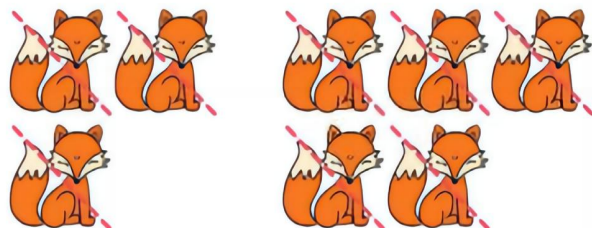
$$\square \bigcirc \square \bigcirc \square = \square$$



$$\square \bigcirc \square \bigcirc \square = \square$$




$$\square \bigcirc \square \bigcirc \square = \square$$




$$\square \bigcirc \square \bigcirc \square = \square$$




$$\square \bigcirc \square \bigcirc \square = \square$$



$$\square \bigcirc \square \bigcirc \square = \square$$



$$\square \bigcirc \square \bigcirc \square = \square$$



$$\square \bigcirc \square \bigcirc \square = \square$$